

Gr. 2

# Math Overall Assessment

**Directions** Darken the circle for the correct answer.

1. What is the difference?

$$\begin{array}{r} 31 \\ - 4 \\ \hline \end{array}$$

- (A) 37      (C) 17  
(B) 25      (D) 27

6. Which is the sum?

$$\begin{array}{r} 12 \\ + 7 \\ \hline \end{array}$$

- (A) 20      (C) 19  
(B) 15      (D) 5

2. Which is the greatest amount?

- (A) twelve      (C) 11  
(B) 10 + 6      (D) 1 ten 4 ones

7. What amount is shown?

- (A) 52 cents  
(B) 42 cents  
(C) 47 cents



3. Which is another way to write  $1\frac{1}{2}$  hours?

- (A) sixty minutes  
(B) ninety minutes  
(C) thirty minutes  
(D) forty minutes

8. Round 17 to the nearest 10.

- (A) 10      (C) 20  
(B) 15      (D) 30

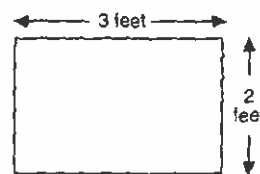
4. Which figure fits next in this pattern?



- (A)   
(B)   
(C)

9. What is the perimeter of this rectangle?

- (A) 5 feet  
(B) 6 feet  
(C) 10 feet  
(D) 12 feet



5. Which number is eighty-nine?

- (A) 809      (C) 98  
(B) 89      (D) 908

10. Which number will make both of these sentences true?

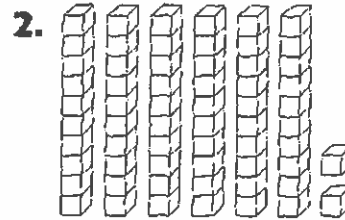
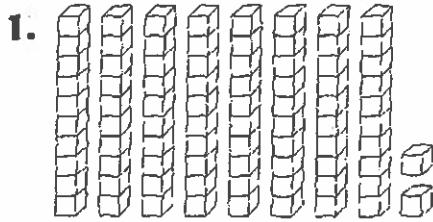
$$\square + 5 = 14$$

$$14 - \square = 5$$

- (A) 6      (C) 8  
(B) 7      (D) 9

# Math Overall Assessment, p. 2

**Directions** Write the number that the blocks show.



3. 5 tens and 9 ones \_\_\_\_\_

4. 8 tens and 6 ones \_\_\_\_\_

**Directions** Write < or > in each circle.

5. 56 ○ 54

6. 36 ○ 37

7. 35 ○ 52

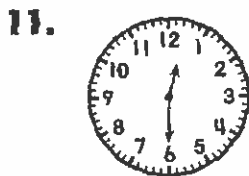
**Directions** Solve and write the answer.

8. 
$$\begin{array}{r} 27 \\ + 38 \\ \hline \end{array}$$


9. 
$$\begin{array}{r} 56 \\ + 43 \\ \hline \end{array}$$

10. 
$$\begin{array}{r} 87 \\ - 58 \\ \hline \end{array}$$


**Directions** Write the times.



\_\_\_\_\_



\_\_\_\_\_



\_\_\_\_\_

**Directions** Write the number that comes before or after.

14. \_\_\_\_\_, 694

15. \_\_\_\_\_, 377

16. 709, \_\_\_\_\_

## GRADE 2: Math Answer Keys

### Page 1

1. D
2. B
3. B
4. C
5. B
6. C
7. A
8. C
9. C
10. D

### Page 2

1. 82
2. 62
3. 59
4. 86
5. >
6. <
7. <
8. 65
9. 99
10. 29
11. 12:30
12. 5:00
13. 4:30
14. 693
15. 376
16. 710